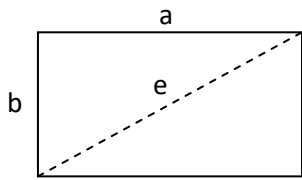
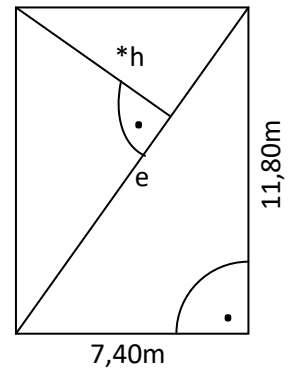
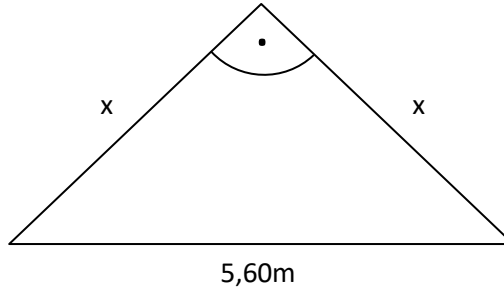
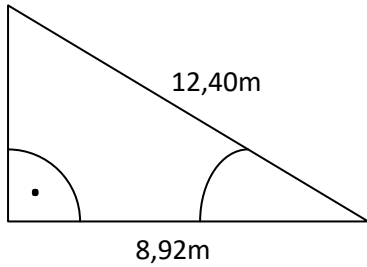
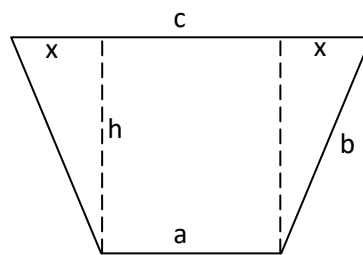


Markiere den / die rechten Winkel und die jeweilige Hypotenuse in den Skizzen!  
 Berechne die geforderten Größen dieser Dreiecke!

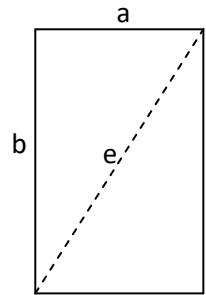


$a = 32\text{ cm}$ ,  $b = 18\text{ cm}$



$a = 10\text{ cm}$ ,  $h = 6,5\text{ cm}$

$x = 1,5\text{ cm}$



$e = 8,2\text{ m}$ ,  $b = 8\text{ cm}$

