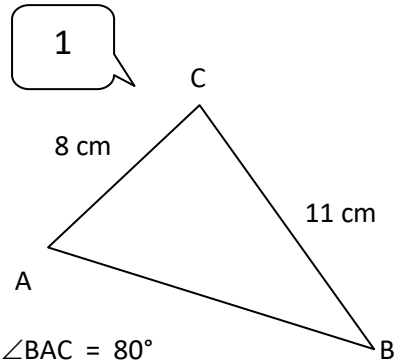
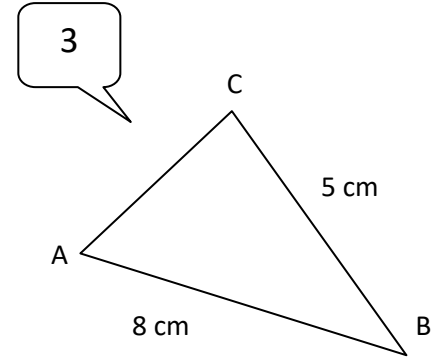
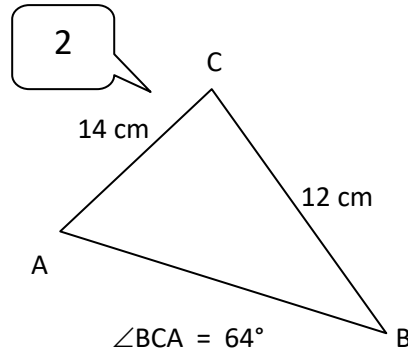


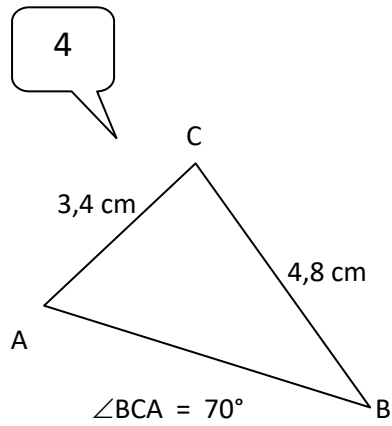
Übernimm die Skizzen! Ermittle alle Seiten und Innenwinkelgrößen! (**Zusatz: Flächeninhalte**)



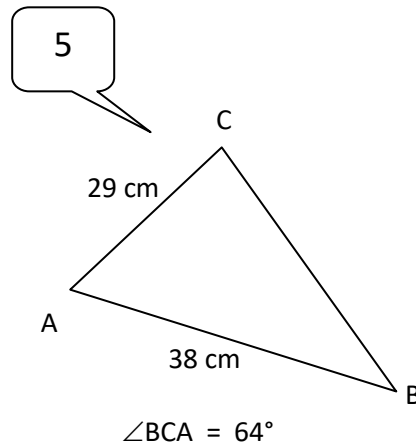
c: 9.066 beta: 45.744 gamma: 54.256 A: 35,7 c=13,9 ; alpha:51 ; beta:65



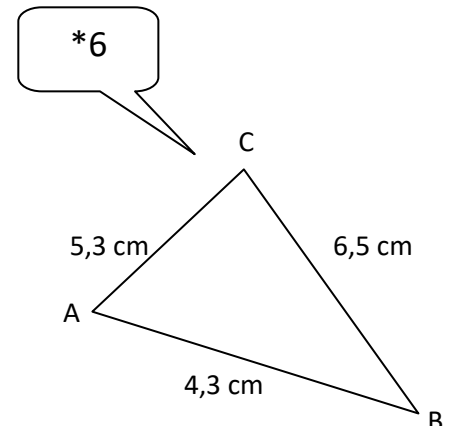
b:7 ; alpha: 38,2 ; gamma 81,8



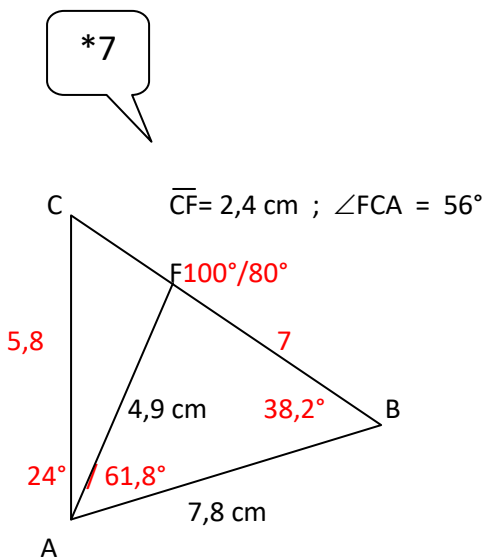
c:4,8(4) alpha:68,7 beta: 41,3



a:40,4 alpha:72,7 beta:43,3



alpha:84,5;beta: 54,3 gamma: 41,2



$\angle MAC = 69^\circ ; \angle CBA = 58^\circ$

$\overline{AM} = 7 \text{ cm}$

