
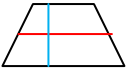


Benenne und Zeichne die Höhe ein!
 Ermittle die **Parallellängen und h!**
 Berechne die Flächeninhalte!

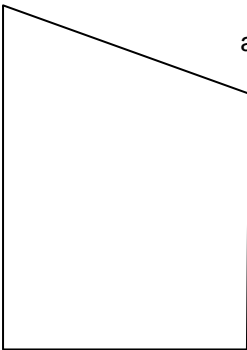
Trapeze



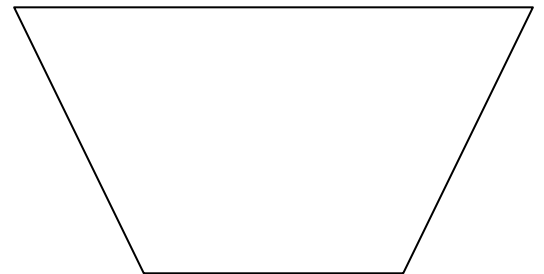
a= c= h=




a= c= h=



a= c= h=



a= c= h=



a= c= h=

Teilen! Aber wie ?

