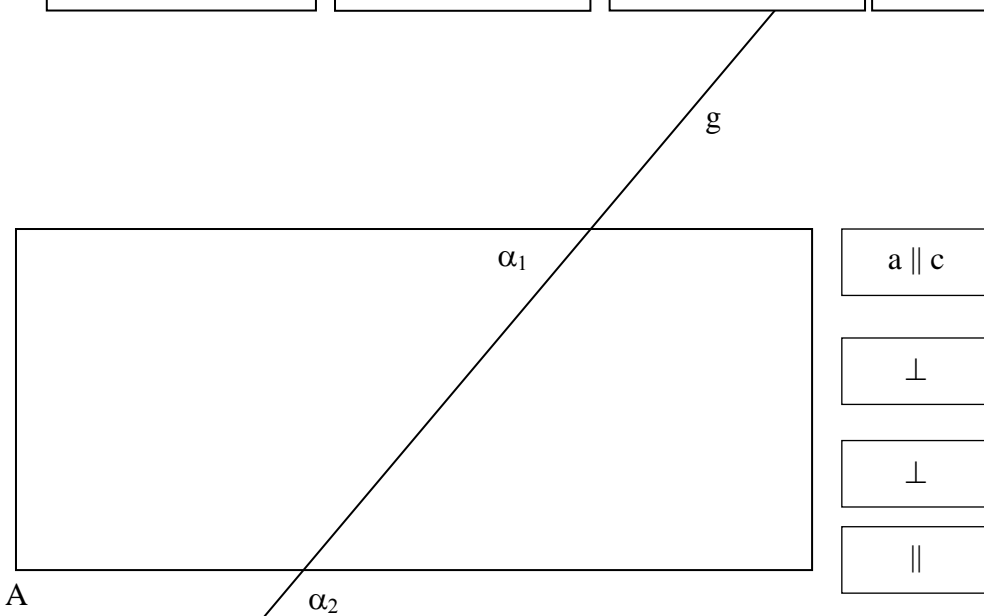


Notiere die Winkelgrößen!

- α_1
- β_1
- γ_1
- δ_1

- α_2
- β_2
- γ_2
- δ_2

<p><u>Scheitelwinkelpaar</u></p>	<p><u>Nebenwinkelpaar</u></p>	<p><u>Stufenwinkelpaar</u></p>	<p><u>Wechselwinkelpaar</u></p>
----------------------------------	-------------------------------	--------------------------------	---------------------------------

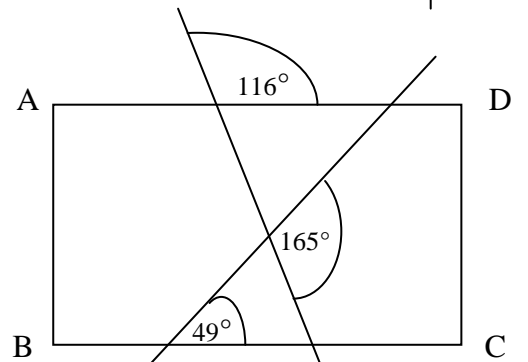
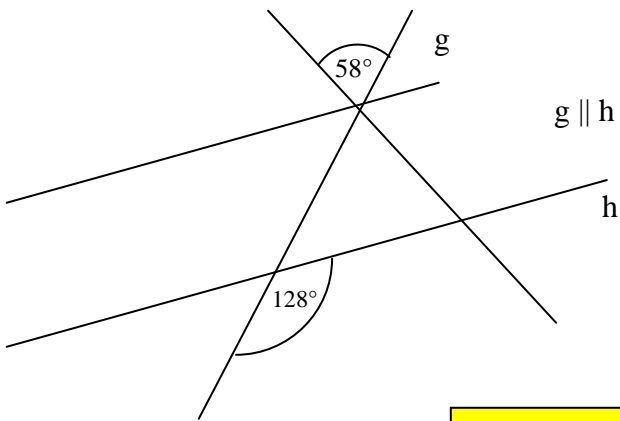
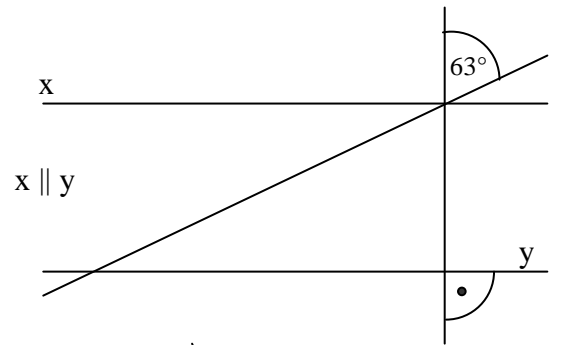
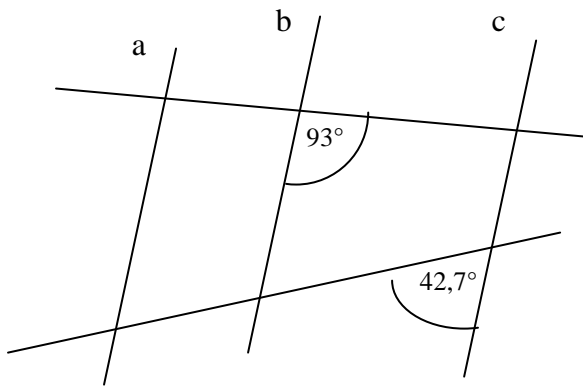
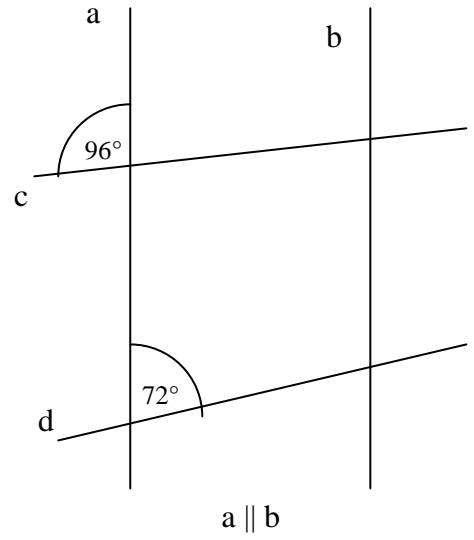
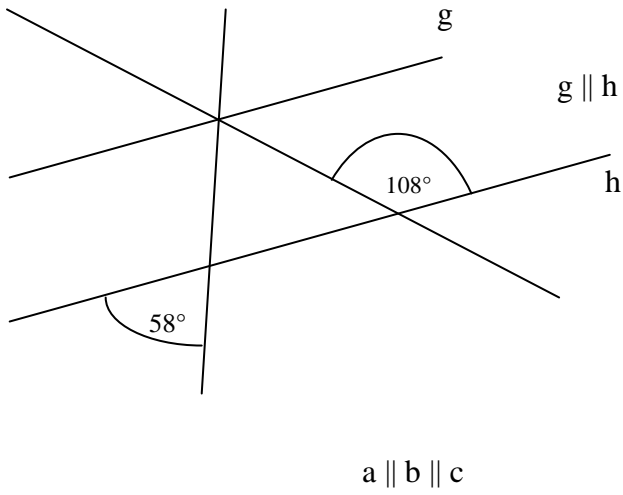


Notiere die Winkelgrößen!

- α_1
- β_1
- γ_1
- δ_1

- α_2
- β_2
- γ_2
- δ_2

<p><u>Scheitelwinkelpaar</u></p>	<p><u>Nebenwinkelpaar</u></p>	<p><u>Stufenwinkelpaar</u></p>	<p><u>Wechselwinkelpaar</u></p>
----------------------------------	-------------------------------	--------------------------------	---------------------------------



ABCD ist ein Rechteck !

www.mathe-lernen.net

