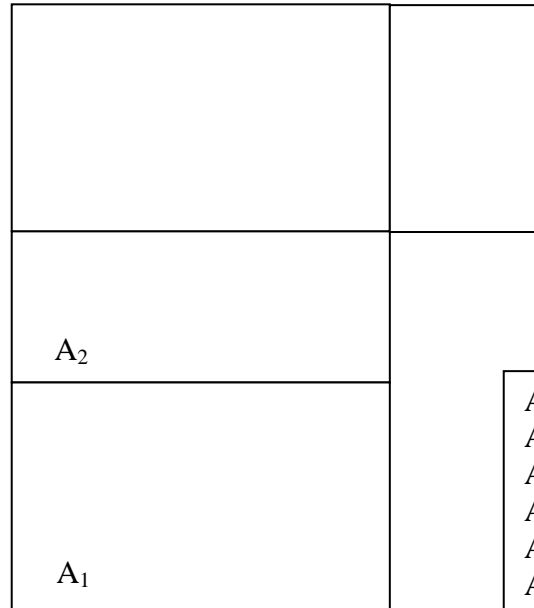
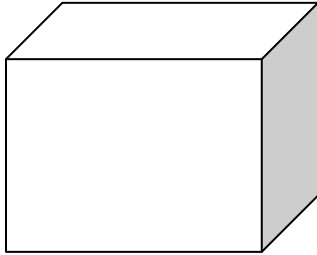


Oberflächen von Quadern

1. Zeichne ein bemaßtes Netz!
2. Berechne alle 6 Teilflächen!
3. Bilde die Gesamtflächensumme!

a = 5 cm
b = 2 cm
c = 3 cm



(Oberfläche)



$A_1 =$
 $A_2 =$
 $A_3 =$
 $A_4 =$
 $A_5 =$
 $A_6 =$

 $A_{\text{gesamt}} =$

a = 3 cm
b = 3 cm
c = 6 cm

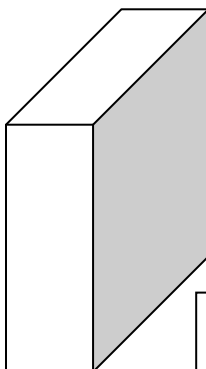


$A_1 =$
 $A_2 =$
 $A_3 =$
 $A_4 =$
 $A_5 =$
 $A_6 =$

 $A_{\text{gesamt}} =$

Z:

Rückseite



a = 2 cm
b = 7 cm
c = 5 cm

$A_1 =$
 $A_2 =$
 $A_3 =$
 $A_4 =$
 $A_5 =$
 $A_6 =$

 $A_{\text{gesamt}} =$